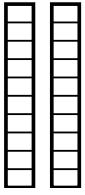


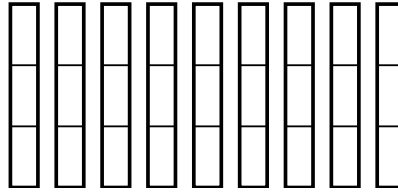


Use the visual models to solve.

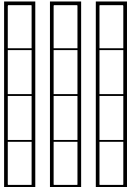
1) $\frac{7}{10} \times 2 =$



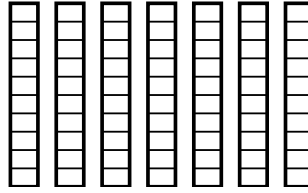
2) $\frac{2}{3} \times 9 =$



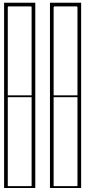
3) $\frac{2}{4} \times 3 =$



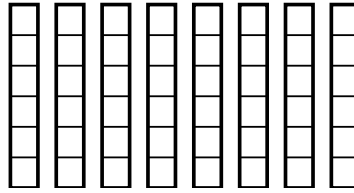
4) $\frac{7}{10} \times 7 =$



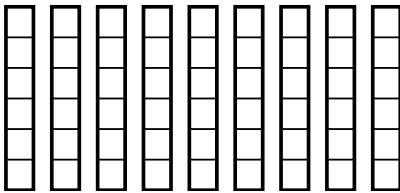
5) $\frac{1}{2} \times 2 =$



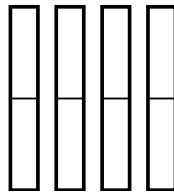
6) $\frac{2}{6} \times 8 =$



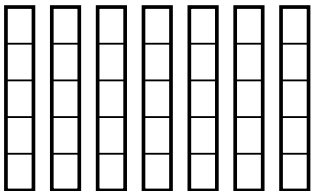
7) $\frac{3}{6} \times 9 =$



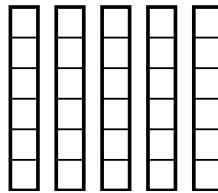
8) $\frac{1}{2} \times 4 =$



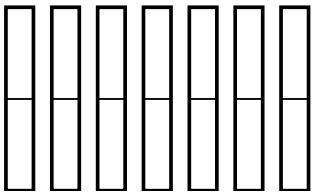
9) $\frac{1}{5} \times 7 =$



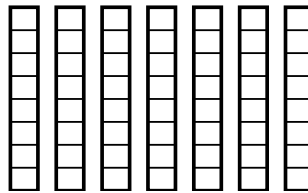
10) $\frac{3}{6} \times 5 =$



11) $\frac{1}{2} \times 7 =$



12) $\frac{6}{8} \times 7 =$



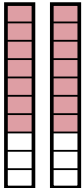
Answers

1. _____
2. _____
3. _____
4. _____
5. _____
6. _____
7. _____
8. _____
9. _____
10. _____
11. _____
12. _____

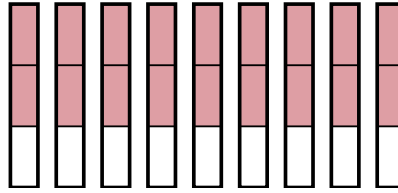


Use the visual models to solve.

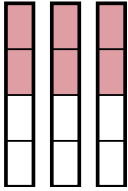
1) $\frac{7}{10} \times 2 =$



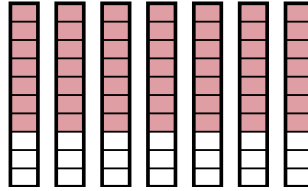
2) $\frac{2}{3} \times 9 =$



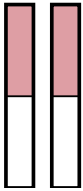
3) $\frac{2}{4} \times 3 =$



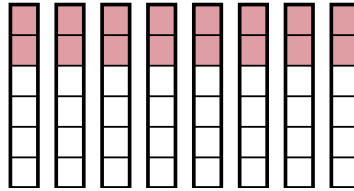
4) $\frac{7}{10} \times 7 =$



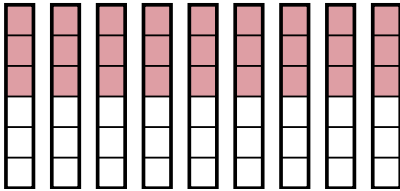
5) $\frac{1}{2} \times 2 =$



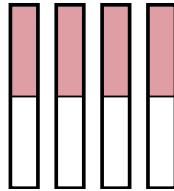
6) $\frac{2}{6} \times 8 =$



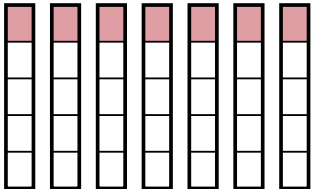
7) $\frac{3}{6} \times 9 =$



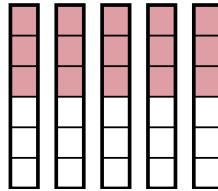
8) $\frac{1}{2} \times 4 =$



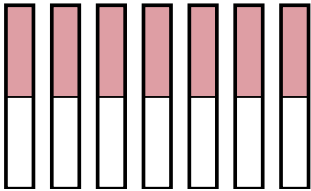
9) $\frac{1}{5} \times 7 =$



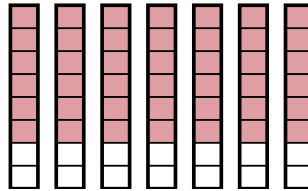
10) $\frac{3}{6} \times 5 =$



11) $\frac{1}{2} \times 7 =$



12) $\frac{6}{8} \times 7 =$



Answers

1. $\frac{14}{10}$

2. $\frac{18}{3}$

3. $\frac{6}{4}$

4. $\frac{49}{10}$

5. $\frac{2}{2}$

6. $\frac{16}{6}$

7. $\frac{27}{6}$

8. $\frac{4}{2}$

9. $\frac{7}{5}$

10. $\frac{15}{6}$

11. $\frac{7}{2}$

12. $\frac{42}{8}$